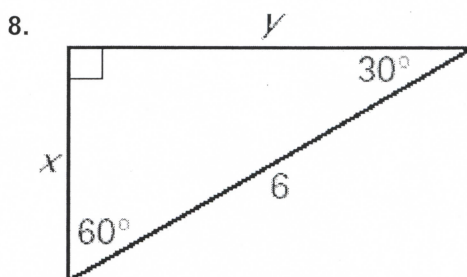
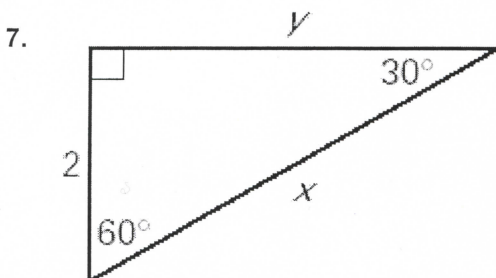
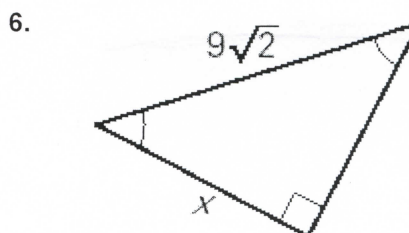
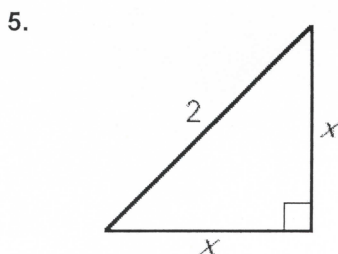
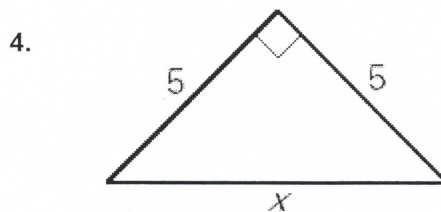
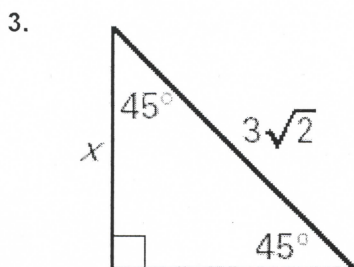
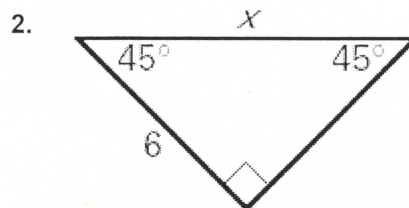
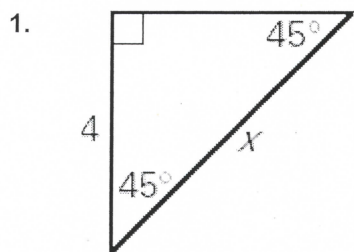


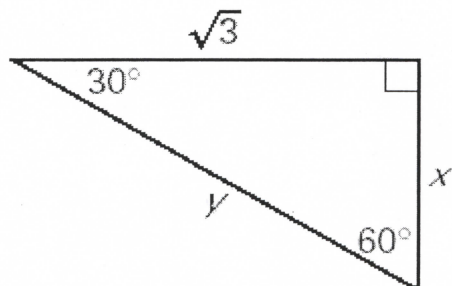
TARGET 7B

Name _____ Date _____

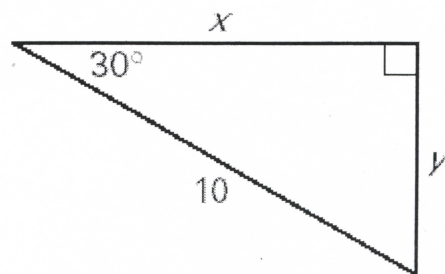
Find the value of x . Write your answer in simplest radical form.



9. ~~10.~~



10. ~~11.~~



TARGET B ANSWERS

1. $4\sqrt{2}$
2. $6\sqrt{2}$
3. 3
4. $5\sqrt{2}$
5. $\sqrt{2}$
6. 9
7. $x=4, y=2\sqrt{3}$
8. $x=3, y=3\sqrt{3}$
9. $x=1, y=2$
10. $x=5\sqrt{3}, y=5$
11. ~~$x=14, y=7\sqrt{3}$~~